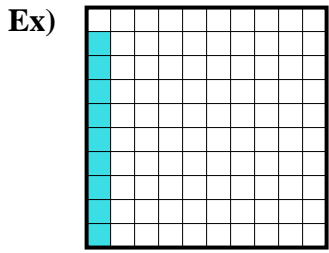
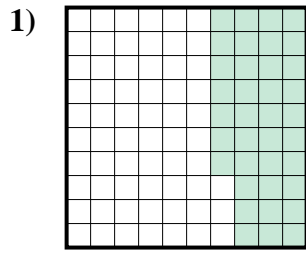




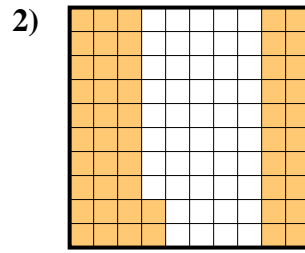
Determine the value written as a fraction , decimal & a percent.



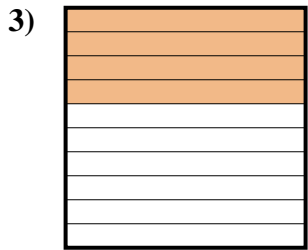
fraction $\frac{9}{100}$
 decimal 0.09
 percent 9



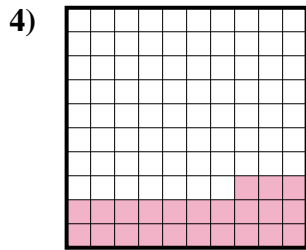
fraction $\frac{37}{100}$
 decimal 0.37
 percent 37



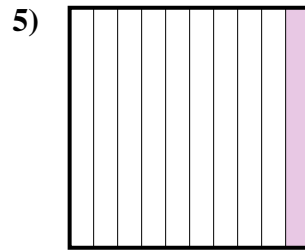
fraction $\frac{52}{100}$
 decimal 0.52
 percent 52



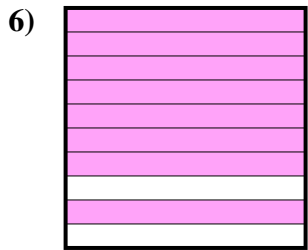
fraction $\frac{4}{10}$
 decimal 0.4
 percent 40



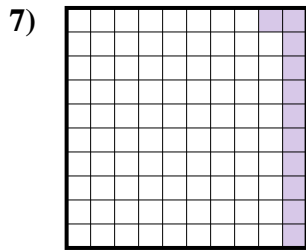
fraction $\frac{23}{100}$
 decimal 0.23
 percent 23



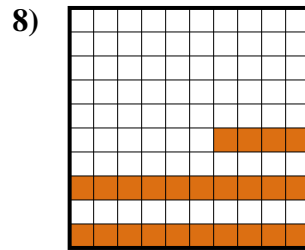
fraction $\frac{1}{10}$
 decimal 0.1
 percent 10



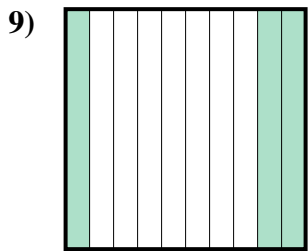
fraction $\frac{8}{10}$
 decimal 0.8
 percent 80



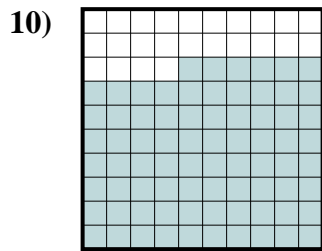
fraction $\frac{11}{100}$
 decimal 0.11
 percent 11



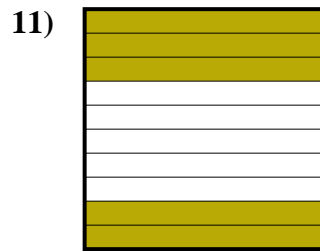
fraction $\frac{24}{100}$
 decimal 0.24
 percent 24



fraction $\frac{3}{10}$
 decimal 0.3
 percent 30



fraction $\frac{76}{100}$
 decimal 0.76
 percent 76



fraction $\frac{5}{10}$
 decimal 0.5
 percent 50

Answers

Ex.	$\frac{9}{100}$	0.09	9%
1.	$\frac{37}{100}$	0.37	37%
2.	$\frac{52}{100}$	0.52	52%
3.	$\frac{4}{10}$	0.4	40%
4.	$\frac{23}{100}$	0.23	23%
5.	$\frac{1}{10}$	0.1	10%
6.	$\frac{8}{10}$	0.8	80%
7.	$\frac{11}{100}$	0.11	11%
8.	$\frac{24}{100}$	0.24	24%
9.	$\frac{3}{10}$	0.3	30%
10.	$\frac{76}{100}$	0.76	76%
11.	$\frac{5}{10}$	0.5	50%